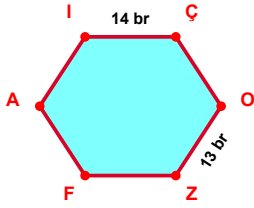
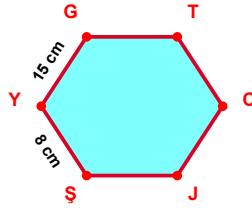


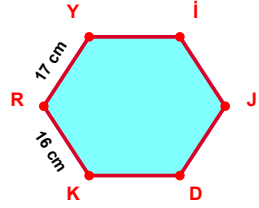
SORU: Aşağıdaki şekillerde verilen, kenar uzunlukları farklarını bulunuz.



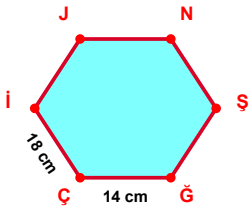
$$|İÇ| - |OZ| = \dots\dots\dots$$



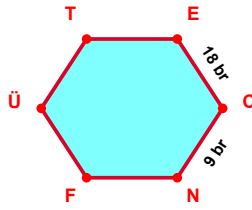
$$|YG| - |ŞY| = \dots\dots\dots$$



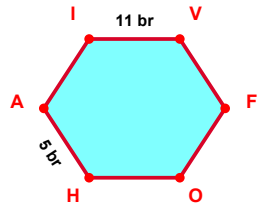
$$|RY| - |KR| = \dots\dots\dots$$



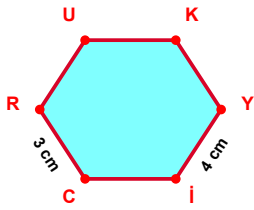
$$|İÇ| - |ĞÇ| = \dots\dots\dots$$



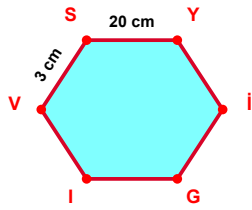
$$|EC| - |CN| = \dots\dots\dots$$



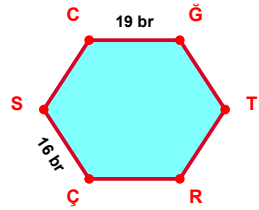
$$|İV| - |HA| = \dots\dots\dots$$



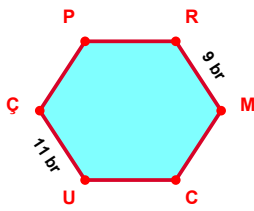
$$|Yİ| - |CR| = \dots\dots\dots$$



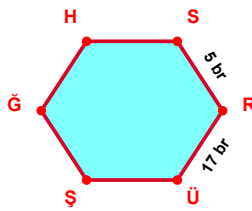
$$|SY| - |VS| = \dots\dots\dots$$



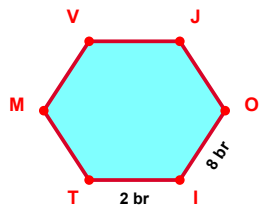
$$|CĞ| - |ÇS| = \dots\dots\dots$$



$$|UÇ| - |RM| = \dots\dots\dots$$

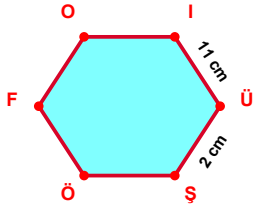


$$|RÜ| - |SR| = \dots\dots\dots$$

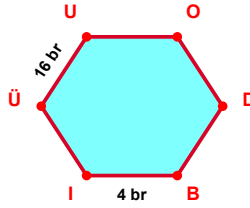


$$|Oİ| - |İT| = \dots\dots\dots$$

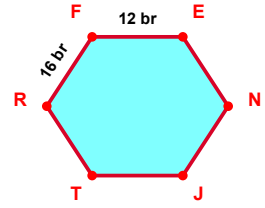
SORU: Aşağıdaki şekillerde verilen, kenar uzunlukları farklarını bulunuz.



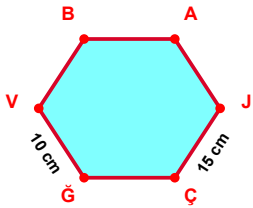
$|IÜ| - |ÜŞ| = \dots\dots\dots$



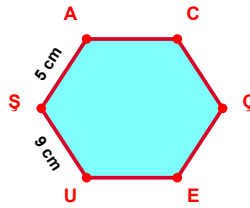
$|ÜÜ| - |BI| = \dots\dots\dots$



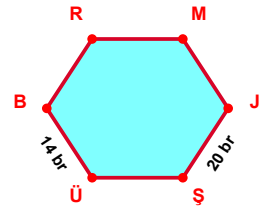
$|RF| - |FE| = \dots\dots\dots$



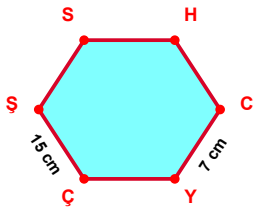
$|JÇ| - |GV| = \dots\dots\dots$



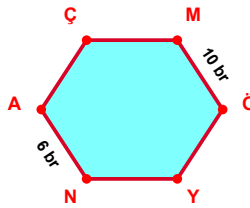
$|UŞ| - |ŞA| = \dots\dots\dots$



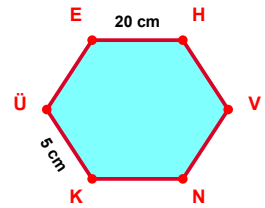
$|JŞ| - |ÜB| = \dots\dots\dots$



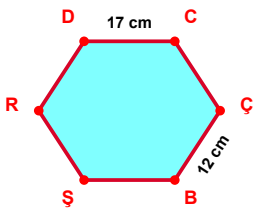
$|ÇŞ| - |CY| = \dots\dots\dots$



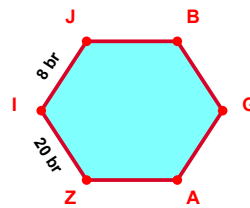
$|MÖ| - |NA| = \dots\dots\dots$



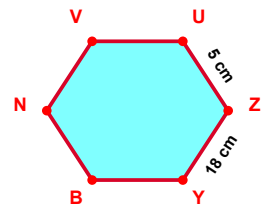
$|EH| - |KÜ| = \dots\dots\dots$



$|DC| - |ÇB| = \dots\dots\dots$



$|ZI| - |IJ| = \dots\dots\dots$



$|ZY| - |UZ| = \dots\dots\dots$

## SÜREÇ ODAKLI DEĞERLENDİRME ÖLÇEĞİ

Doğru Sayısı: ..... / 24

Öğretmen ilgili kutucuğu işaretler.

Geliştirilmeli (0-8)

İyi (9-14)

Çok İyi (15-20)

Mükemmel (21-24)

☐☐☐☐

Hazırlayan: .....

Bu bölüme sınıfınızın ilgili kazanıma yönelik genel durumuna ilişkin gözlem ve izlenimlerinizi, öğrencilerinizin bu kazanımla ilgili öğrenme eksikliklerini ve bu eksikliklerin giderilmesi amacıyla yaptığınız/yapmayı planladığınız faaliyetleri not edebilirsiniz.

No	Adı - Soyadı	Toplam Puan	Değerlendirme
1			
2			
3			
4			
5			
6			
7			
8			
9			
10			
11			
12			
13			
14			
15			
16			
17			
18			
19			
20			
21			
22			
23			
24			
25			
26			
27			
28			
29			
30			
31			
32			
33			
34			
35			

Hazırlayan: ..... ..